


St. MICHAEL'S SCHOOL, MURI (2020-2021)

CLASS:- U.K.G.


SUB:- MATH.

LP Page No: _____
Date: 11


Q1. Count and circle the correct number. One is done for you.



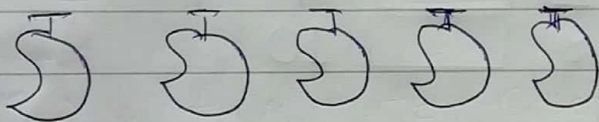
3
4
5




6
8
7



4
2
3



4
5
6



2
3
4

Q.2. Write the numbers name.

1

6

2

7

3

8

4

9

5

10

Q.3. What comes.

Before ?	After ?	Between ?
<input type="text"/> 3	5 <input type="text"/>	6 <input type="text"/> 8
<input type="text"/> 4	1 <input type="text"/>	3 <input type="text"/> 5
<input type="text"/> 8	7 <input type="text"/>	5 <input type="text"/> 7
<input type="text"/> 6	8 <input type="text"/>	2 <input type="text"/> 4
<input type="text"/> 9	2 <input type="text"/>	8 <input type="text"/> 10

Q.4. Match the following. (1-10)

Five -	8	<input type="checkbox"/>
One -	5	<input type="checkbox"/>
Eight -	3	<input type="checkbox"/>
Ten -	1	<input type="checkbox"/>
Four -	9	<input type="checkbox"/>
Two -	7	<input type="checkbox"/>
Six -	6	<input type="checkbox"/>
Nine -	10	<input type="checkbox"/>
Three -	2	<input type="checkbox"/>
Seven -	4	<input type="checkbox"/>