

CLASS - L.K.G

SUBJECT - MATHS

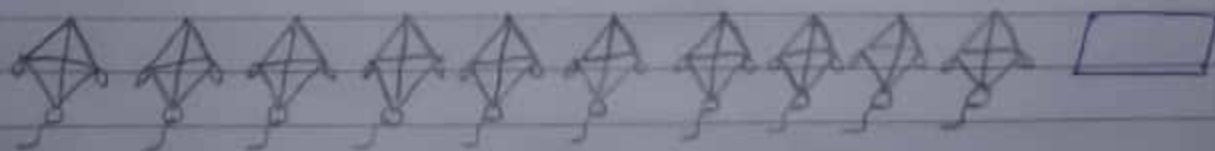
(1)

(S)

① Learn and write numbers name with Spelling 1 to 50.

(Example:- 1 - One , 30 - Thirty)


② Count the pictures in each row and write in the box :-

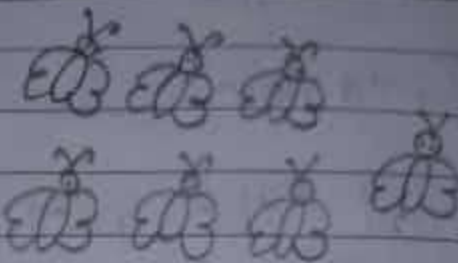


①


②


③ Count the pictures in each set and encircle the correct number :-

	8
	5
	4

	7
	5
	6

	2
	9
	7

	1
	6
	4

	8
	1
	4

	3
	4
	10

4

3

4) Fill in the blanks :-

① O \_ E

⑥ S \_ \_

② T \_ \_

⑦ S \_ \_ E \_

③ T \_ R \_ E

⑧ E \_ G \_ \_

④ F \_ U \_

⑨ N \_ N \_

⑤ F \_ \_ E

⑩ T \_ N

5) What comes before, after and between?

BEFORE ?

AFTER ?

BETWEEN ?

\_ 2

5 \_

3 \_ 5

\_ 5

8 \_

8 \_ 10

\_ 9

9 \_

6 \_ 8

\_ 6

7 \_

7 \_ 9

\_ 4

1 \_

5 \_ 7

6) Write the biggest number in the box :-

6 8 1 9 3 5

5 7 1 8 6 3

4 5 2 6 3 1

1 5 2 8 9 3

3 7 10 8 6 5

7) Write the smallest number in the box :-

3	5	7	4	6	2	○
6	8	4	9	3	5	○
5	6	9	8	2	3	○
9	2	1	8	10	3	○
7	9	1	8	3	10	○

8) Learn and write the table of 4 to 6.

9) My favourite practice book of Mathematics  
(part B) — Complete from page no-3 to 72.